

Appréciation :

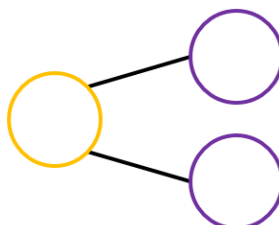

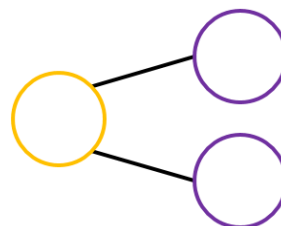

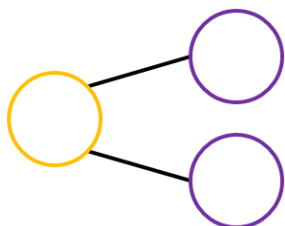
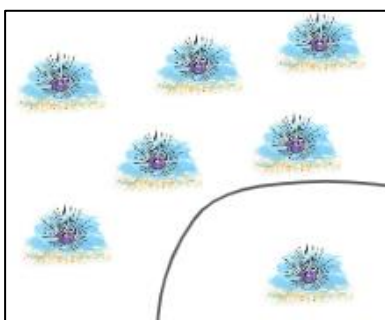
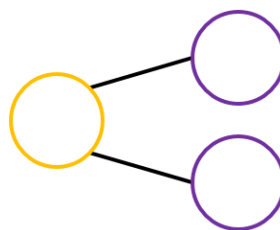

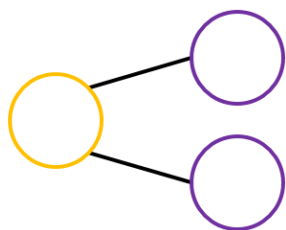
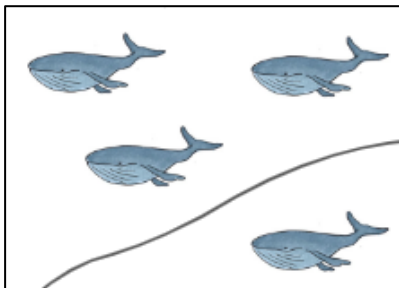
Les histoires de nombres - Les familles de 5

/15

1 ECRIS l'arbre qui correspond à la situation.

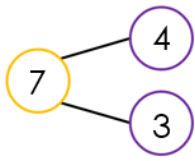
/5

Les illustrations de cet exercice sont issues du livre « La numération de 0 à 10 » de NurVéro et Céline Ménéret

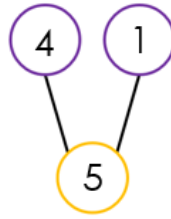


2 **COLORIE** le train de cubes pour qu'il corresponde au schéma.

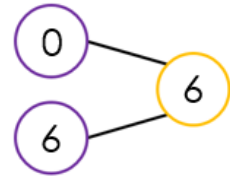
/5



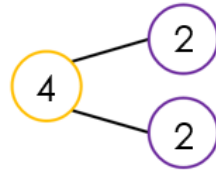
--	--	--	--	--	--	--	--	--	--



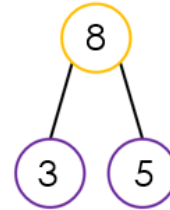
--	--	--	--	--	--	--	--	--	--



--	--	--	--	--	--	--	--	--	--



--	--	--	--	--



--	--	--	--	--	--	--	--	--	--

3 **COMPLETE** la maison de 5.

/5

5	
0	
	3
2	
	1
4	